



**Seth Dwarka Prasad Bajaj Education Centre**  
**Vindhyachal Road, Meerjapur**  
**Class- IV**  
**Holiday Homework 2024-25**

---

**Dear Parents,  
Warm greetings!**

For the past one month we enjoyed taking care of your precious children. You might have noticed that they all loved to come to school. For the next 39 days... you, their natural guardian will spend the vacation with them. Let's share some tips to make this period a fruitful and happy period for them.

**Kindly ensure that your child adheres to :-**



***Some do's and don'ts during  
summer vacation.***

**Do's**

- ❖ Eat a nutritious diet with plenty of water. Include citrus fruits (orange, lemon, grapefruit) and vegetables which are rich in vitamin C, vitamin D and zinc-containing foods (legumes, lentils, beans and nuts).
- ❖ Wash your hands frequently, always with soap and water for at least 20 seconds.
- ❖ Wear light cotton clothes.
- ❖ Be a leader in keeping yourself, family and community healthy.
- ❖ Help your family members.
- ❖ Be responsible.

**Don'ts**

- ❖ Don't dirty your place of living.
- ❖ Don't have junk food.
- ❖ Don't watch too much TV.
- ❖ Don't use mobile without need.
- ❖ Don't waste time being lazy.

## **HEY KIDS! Have A Happy, Happening Break!!**

**Children..., holidays are fun. Thirty nine days of no morning sun. Late rising, lazy afternoon watermelon and mangoful spoons, watching television at any hour of the day, playground and fun are not very far away. But are holidays supposed to make us irresponsible kids?**

**No. So we're going to take up certain responsibilities doing certain task and also enjoy our holidays with our families.**

**We have planned a small package of Holiday Homework and tried that you are not over burdened at any stage. It is just to ensure that you remain in touch with your studies and enhance your knowledge, skills and even memory.**

---

### **Guidelines for Holiday Homework**

- ❖ **The Holiday Homework must be done in very neat and presentable manner.**
  - ❖ **Parents are requested to only guide their children while doing the assignments. The child has to do the homework in his/her own handwriting.**
  - ❖ **You must establish a set time each day to complete the holiday homework.**
  - ❖ **Revise all the work done in the books and notebooks.**
- 

### **Do the following work in the book only**

S.No.	Subject	Book Name	Pages
1.	English I	Tune in to Grammar	<ul style="list-style-type: none"><li>• Page No. 1 Exercise B and D</li><li>• Page No. 2 Exercise E and F</li><li>• Page No. 6 Exercise A [Learn]</li><li>• Page No. 168 Exercise A</li></ul>
2.	Hindi II	Hindiville-4	<ul style="list-style-type: none"><li>• Page No. 22 [Exercise 1 &amp; 3]</li><li>• Page No. 24 [Exercise 10]</li></ul>
3.	Science	Science Venture-4	<ul style="list-style-type: none"><li>• Page No. 66 [Exercise 2 &amp; 4]</li></ul>
4.	S.St.	Preparatory Stage Social Studies	<ul style="list-style-type: none"><li>• Page No. 36 [Exercise A]</li><li>• Page No. 39 [Exercise B &amp; C]</li></ul>
5.	G.K.	New Generation Knowledge	<ul style="list-style-type: none"><li>• Page No. 10, 16, 19 &amp; 34</li></ul>
6.	Computer	Digital Voyage Computer Science Series (Revised)-4	<ul style="list-style-type: none"><li>• Page No. 30 (Q.No. 1)</li><li>• Page No. 31 (Q.No. 4)</li></ul>
7.	Art	Aesthetics Art and Activity 4	<ul style="list-style-type: none"><li>• Page No. 16, 19 &amp; 31</li></ul>

## Do the following work in the notebook



### English - I [Tune into Grammar] :-

I. **Comprehension** - Page No. 168 [Exercise B]

II.

## Describing people

Write the words in the correct column.

BLACK HAIR	SHORT	MIDDLE-AGED	BALD
PLUMP	RED HAIR	MOUSTACHE	GRAY HAIR
CURLY HAIR	SLIM	SHORT HAIR	BLONDE HAIR
STRAIGHT HAIR	BLUE EYES	LONG HAIR	BEARD
YOUNG	GREEN EYES	BROWN HAIR	TALL
	BROWN EYES	OLD	

Hair color	Hair style	Eyes	Facial hair	Body build	Age	Height

**III. Look at the picture given below and answer the following questions in full sentences.**



- 1) Where does the scene take place? It.....
- 2) How many people are in the picture? There are....
- 3) How many are in the foreground?
- 4) When does the scene take place? Refer to the season and time of the day. Mention what the weather is like.
- 5) Describe the path. (On the left or in the middle.... Straight or winding...)
- 6) What are the two boys in the foreground doing?
- 7) How do they look? (miserable or happy)
- 8) What is happening in the pond and beside the pond?
- 9) Who is under the tree and what are they doing?
- 10) There are two people on the path. What is each one doing?
- 11) What is strange about the cat and the dog?

#### IV.

## Who Are You?

Draw your face in the middle of the page.  
Complete the speech bubbles with information about yourself.

My name is .....

I come from .....

I am ..... years old.

My address is .....

My Mobile Number is .....

I live in .....

I've got ..... sisters and ..... brothers.

My mum is a ..... and my dad is a .....

I've got ..... pet(s). Its/Their name(s) is/are .....

I'm good at .....

I'm bad at .....

My favourite food is .....

My favourite sport is .....

My favourite place is .....

My favourite computer game is .....

My favourite group/singer is .....

My favourite subject at school is .....

My friends are called .....

I love .....

I hate .....

**V. Rewrite the following sentences using capital letters, full stop and question mark :-**

- a) what is the name of your school
- b) a cat has long tail
- c) radha is my friend
- d) an aapple is red in colour
- e) rita is sitting on a chair
- f) the crow is black in colour
- g) how are you
- h) gopal goes to school by bus
- i) i have a blue pen
- j) there are many flowers in the garden

**English - II :-**


Read the story 'The Scholar's Mother Tong' (Blossom English Reader) make a Puppet (using waste materials like card board, thread, waste wool etc.) of your favourite character and write five sentences about the character.



3. नीचे दिए गए चित्रों को देखो। इसी क्रम से स्वर और व्यंजन वर्णों को लिखो।

स्वरों के स्थान पर मात्रा लगाओ। स्वरों और व्यंजनों को जोड़कर शब्द बनाओ

और शब्दों को जोड़कर वाक्य।



1 2 3 4 5 6 7 8 9 10 11 12 13 14 15 16 17 18

[ ] + ए + [ ] + [ ] + भ + आ + [ ] + [ ] + [ ] + [ ] + [ ] + [ ] + [ ] + [ ] + न + [ ] + ह + ऐ

[ ] + [ ]

[ ] + [ ] + [ ]

[ ] + [ ] + [ ]

[ ]

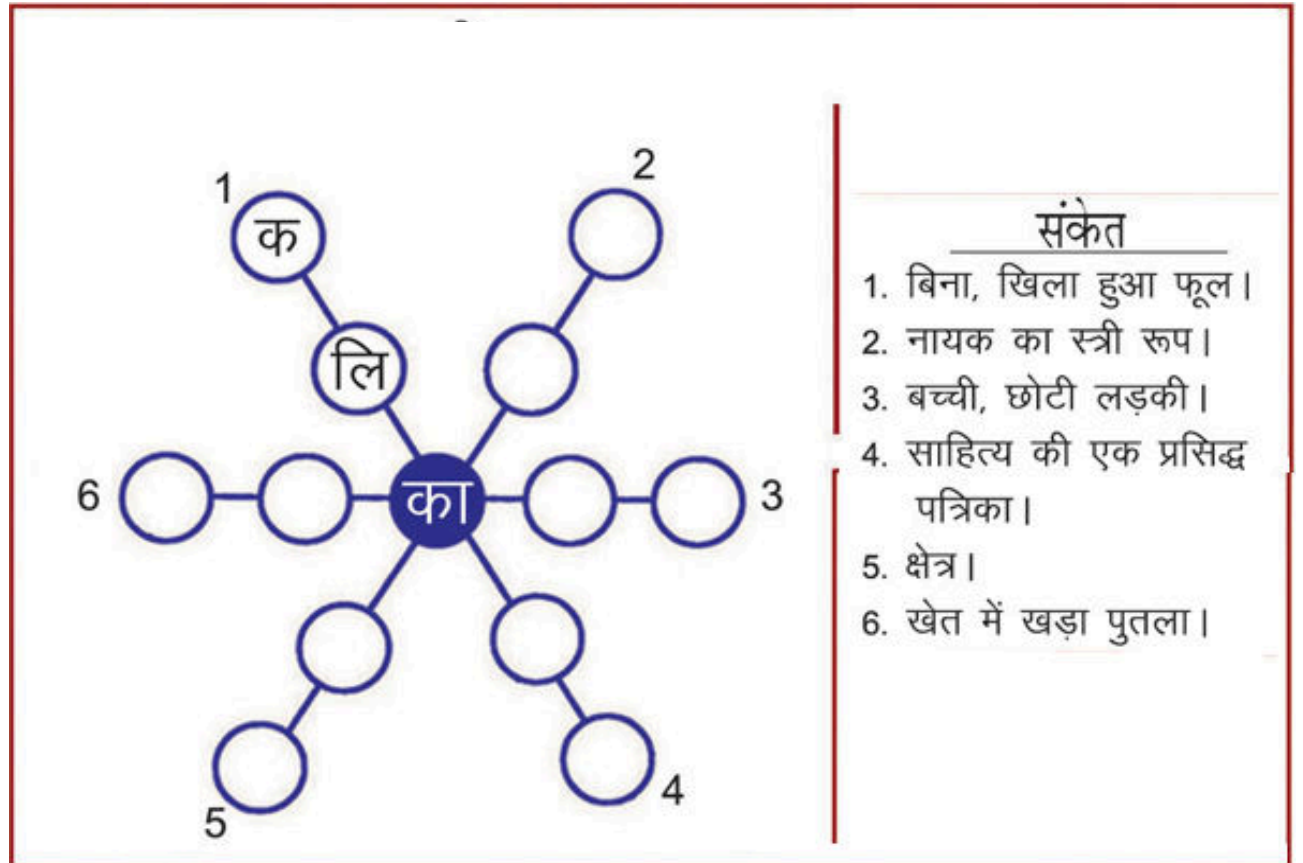
[ ]

[ ]

[ ]

[ ]

#### 4. शब्दगोल –



5. शब्द बनाओ और लिखो।



हाथ साथी  
हाथी

पैसा मोर  
पैसा

रोना चोटी  
रोना

गाय नाक  
गाय

बेटा पेटी  
बेटा

चूहा पूड़ी  
चूहा

बैल आग  
बैल

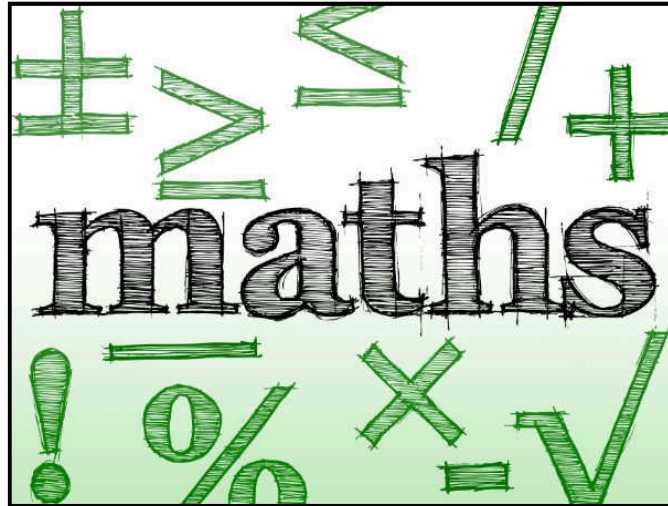
गरम लाल  
गरम

खाना आओ  
खाना


कब सब  
कब

यह दाल  
यह

बैल उठना  
बैल



1. Ranjana went to the market to buy fruits. She bought 125 mangoes, 241 bananas, 100 apples and 85 papayas for a small get together on the occasion of her daughter's birthday party.



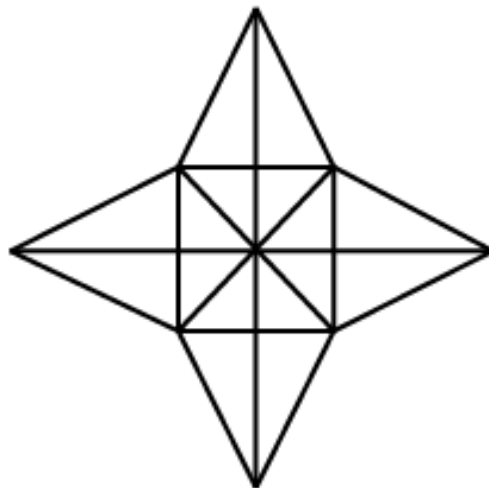
Answer the following questions.

1. How many mangoes and bananas did Ranjana buy altogether?  
\_\_\_\_\_
2. How many fruits did Ranjana buy in all?  
\_\_\_\_\_
3. Ranjana wants to distribute 1 banana to each child in the orphanage? She needs 39 more bananas for the purpose. How many children are there in the orphanage?  
\_\_\_\_\_

**2. Draw and name measuring device that you would use to measure the following -**

- 1 kg tomato
- Milk
- Time
- Temperature
- Measuring the cloth

**3. How many triangles are there in the given figure?**



#### 4. Make the Bill :-

Lee bought all toys from the top shelf of the toy shop and Adam bought all the toys from the bottom shelf. Can you make a bill for them ?



Rs 80



Rs 40



Rs 3



Rs 11



Rs 13



Rs 18



Rs 21



Rs 17

##### Lee's bill

Items	Amount
<input type="text"/>	<input type="text"/>
<input type="text"/>	<input type="text"/>
<input type="text"/>	<input type="text"/>
<input type="text"/>	<input type="text"/>
<input type="text"/>	<input type="text"/>
Total	<input type="text"/>

##### Adam's bill

Items	Amount
<input type="text"/>	<input type="text"/>
<input type="text"/>	<input type="text"/>
<input type="text"/>	<input type="text"/>
<input type="text"/>	<input type="text"/>
<input type="text"/>	<input type="text"/>
Total	<input type="text"/>

Whose bill is more?

By how much?



**5. Shreya decided to conduct a study on the types and numbers of cakes sold in her shop. She took down the details of the different flavours of cakes sold over two weeks.**

<b>Flavours</b>	<b>Week 1</b>	<b>Week 2</b>
<b>Coffee Cakes</b>	<b>45</b>	<b>36</b>
<b>Butterscotch Cakes</b>	<b>37</b>	<b>49</b>
<b>Vanilla Cakes</b>	<b>42</b>	<b>38</b>
<b>Strawberry Cakes</b>	<b>27</b>	<b>37</b>
<b>Pineapple Cakes</b>	<b>45</b>	<b>48</b>
<b>Fruit Cakes</b>	<b>49</b>	<b>64</b>

**Answer the questions given below :**

- Which flavour was the most popular in Week 2?**
- Which flavour had the maximum sales in Week 1?**
- Which flavour had the minimum sales in Week 1?**
- Which flavour was the least popular in Week 2?**
- How many more butterscotch cakes were sold in Week 2?**

**6. Solve the following riddles :**

- a) In a building there are 100 rooms. Sahil was asked to paint numbers 1 to 100 on each door. If so, how many times will Sahil have to paint the number seven?
- b) In a wheel, there are 64 spokes. If so, how many spaces are between these spokes?
- c) Half of an apple is greater than, equal to or less than one third of an apple?
- d) If you multiply me by any other number, the answer will always be the same? What number am I?
- e) If 7 may is Tuesday, what is the day on
  - (i) 21 May
  - (ii) 24 May

**7. Read the following word problems and solve it with proper statement.**

- a)** A shopkeeper earned Rs. 4250 on Monday. On Tuesday, he earned Rs. 4200 more than what he had earned on Monday. How much money did he earn in these two days?
- b)** A black and white TV costs Rs. 3369. A colour TV is Rs. 2176 costlier. What is the price of the colour TV?
- c)** A factory produced 5768 electric bulbs in one year. The next year, it produced 9785 bulbs. By how much did the factory's production increase?
- d)** If 54 vehicles cross a bridge daily, how many vehicles will cross it in the month of March?
- e)** Reena has 512 twenty-rupee notes. How much money does she have?



1. Write any three plants' names from which we obtained :-

- (i) wood
- (ii) fibre
- (iii) medicine
- (iv) fruits

● **Also draw or paste the pictures of each plants.**

2. Germinate a plant from seeds, put it in a decorative pot and take care of it for growing well.

Explain the stages of germination with the help of diagram.

# Social Studies




## 1. Do the following activity in your Social Studies Notebook.

**Reading a map: Places around town**

Write north, south, east and west in the spaces to complete each sentence.


1. The pet shop is \_\_\_\_\_ of the park.
2. The flower shop is \_\_\_\_\_ of the library.
3. The school is \_\_\_\_\_ of the police station.
4. The hospital is \_\_\_\_\_ of the airport.
5. The bakery is \_\_\_\_\_ of the police station.
6. The library is \_\_\_\_\_ of the supermarket.
7. The hospital is \_\_\_\_\_ of the restaurant.
8. The police station is \_\_\_\_\_ of the school.



**1.**How well do you know your country?

Name the following and paste pictures. Also write a few lines on each of them.

- a) National Flag
- b) National Emblem
- c) National Animal
- d) National Bird
- e) National Anthem
- f) National Game
- g) National Flower
- h) National Fruit
- i) National Currency



1. Name the following parts of a computer.



2. Draw computer keyboard and colours the keys accordingly in your computer notebook.

- |                   |            |                  |          |
|-------------------|------------|------------------|----------|
| • Number keys -   | ORANGE     | • Alphabet keys- | GREEN    |
| • Backspace keys- | PINK       | • Enter keys -   | RED      |
| • Tab keys -      | YELLOW     | • Spacebar keys- | BROWN    |
| • Alt Keys -      | PURPLE     | • Shift keys -   | BLUE     |
| • Caps Lock key-  | BLACK      | • Ctrl keys -    | SKY BLUE |
| • Function keys-  | DARK GREEN |                  |          |



**Check the weather forecast of your city (Meerjapur) for 15 days and make a chart on A4 sheet.**

**Hint :-**

S.No.	Date	Day	Maximum temperature	Minimum temperature
1				
2				
3				

