



SETH DWARKA PRASAD BAJAJ EDUCATION CENTRE

Vindhyachal Road, Meerjapur

Class- VI

HOLIDAY HOMEWORK 2024-25

Dear Parents,
Warm greetings!

For the past one month we enjoyed taking care of your precious children. You might have noticed that they all loved to come to school. For the next 39 days... you, their natural guardian will spend the vacation with them. Let's share some tips to make this period a fruitful and happy period for them.

Kindly ensure *that your child adheres to:-*



***Some do's and don'ts during
summer vacation.***

Do's

- ❖ Eat a nutritious diet with plenty of water. Include citrus fruits (orange, lemon, grapefruit) and vegetables which are rich in vitamin C, vitamin D and zinc-containing foods (legumes, lentils, beans and nuts).
- ❖ Wash your hands frequently, always with soap and water for at least 20 seconds.
- ❖ Wear light cotton clothes.
- ❖ Be a leader in keeping yourself, family and community healthy.
- ❖ Help your family members.
- ❖ Be responsible.

Don'ts

- ❖ Don't dirty your place of living.
- ❖ Don't have junk food.
- ❖ Don't watch too much TV.
- ❖ Don't use mobile without need.
- ❖ Don't waste time being lazy.

HEY KIDS! Have A Happy, Happening Break!!

Children..., holidays are fun. Thirty nine days of no morning sun. Late rising, lazy afternoon watermelon and mangoful spoons, watching television at any hour of the day, playground and fun are not very far away. But are holidays supposed to make us irresponsible kids?

No. So we're going to take up certain responsibilities doing certain task and also enjoy our holidays with our families.

We have planned a small package of Holiday Homework and tried that you are not over burdened at any stage. It is just to ensure that you remain in touch with your studies and enhance your knowledge, skills and even memory.

GUIDELINES FOR HOLIDAY HOMEWORK

1. The holiday homework must be done in neat & presentable manner.
2. The work has to be done in respective subject notebook/book.
3. Parents can be the facilitators for the child at home but let the child complete all his/her work by his/her own.
4. You must establish a set time each day to complete the holiday homework.
5. Revise all the work done in the books and notebooks.

Do the following work in the book only

S.No.	Subject	Book Name	Pages
1.	Hindi I	आओ व्याकरण सीखे	Page No. 34 Exercise 4 & 5
2.	Biology	ICSE Biology	Page No. 5 Exercise B & C
.	Geography	Inspired Geography	Page No. 22 Q. No. A, B & C
4.	Computer	Rise Up Computers	Page No. 11 Exercise 1 (Activity Time)
5.	G.K.	New Generation Knowledge	Page No. 28, 32, 44, 58 & 68
6.	Art	A Book of Art and Craft	Page No. 45 & 64

Do the following work in the notebook










ENGLISH – I (The Maturing Seed)














1. Do the comprehension given on page no. – 143
2. Interchange the Alphabets to find a new hidden words

(a) LOOTS	-	<input type="text"/> <input type="text"/> <input type="text"/> <input type="text"/> <input type="text"/>
(b) RATS	-	<input type="text"/> <input type="text"/> <input type="text"/> <input type="text"/>
(c) PART	-	<input type="text"/> <input type="text"/> <input type="text"/> <input type="text"/>
(d) THUS	-	<input type="text"/> <input type="text"/> <input type="text"/> <input type="text"/>
(e) STEW	-	<input type="text"/> <input type="text"/> <input type="text"/> <input type="text"/>
(f) MALE	-	<input type="text"/> <input type="text"/> <input type="text"/> <input type="text"/>
(g) LIVE	-	<input type="text"/> <input type="text"/> <input type="text"/> <input type="text"/>
(h) ROME	-	<input type="text"/> <input type="text"/> <input type="text"/> <input type="text"/>
(i) BOARD	-	<input type="text"/> <input type="text"/> <input type="text"/> <input type="text"/> <input type="text"/>
(j) SENT	-	<input type="text"/> <input type="text"/> <input type="text"/> <input type="text"/>
(k) TAPES	-	<input type="text"/> <input type="text"/> <input type="text"/> <input type="text"/> <input type="text"/>
(l) SAVE	-	<input type="text"/> <input type="text"/> <input type="text"/> <input type="text"/>
(m) TEAM	-	<input type="text"/> <input type="text"/> <input type="text"/> <input type="text"/>

3. Read the following picture story and complete it with given words:

sea	walk	canoeing	tent	mushrooms	camp	boat	towns
car	ball	parents	sunny	bus	woods	friends	fishing
blueberries	castles	plane	swimming	sunbathing	island		

I always go to a summer  , with my  in July. We stay in a  near a river. On  days, we go  , or play  games. We also like picking  and  in the  .

Sometimes we go on a trip. We can  or go by  , visit old  , or interesting  . In August my  have their holidays, too. We travel the  . We fly by  to the seaside in far-away countries or even to an  . When my dad drives a  , we always take a  with us to go  along the beach. Mum loves  , but dad prefers  .

ENGLISH – II (The Oak Tree)

1. If you get a chance to become the narrator of the story “The Little Match Girl”. How would you end the story?

HINDI-II (मंथन)

1. पृष्ठ संख्या– 144 पर दिए गए प्रश्न संख्या 2 (अपठित गद्यांश) के उत्तर कॉपी में लिखें।
2. पक्षियों को पालना उचित है या नहीं। अपने विचार दस वाक्यों में लिखें।

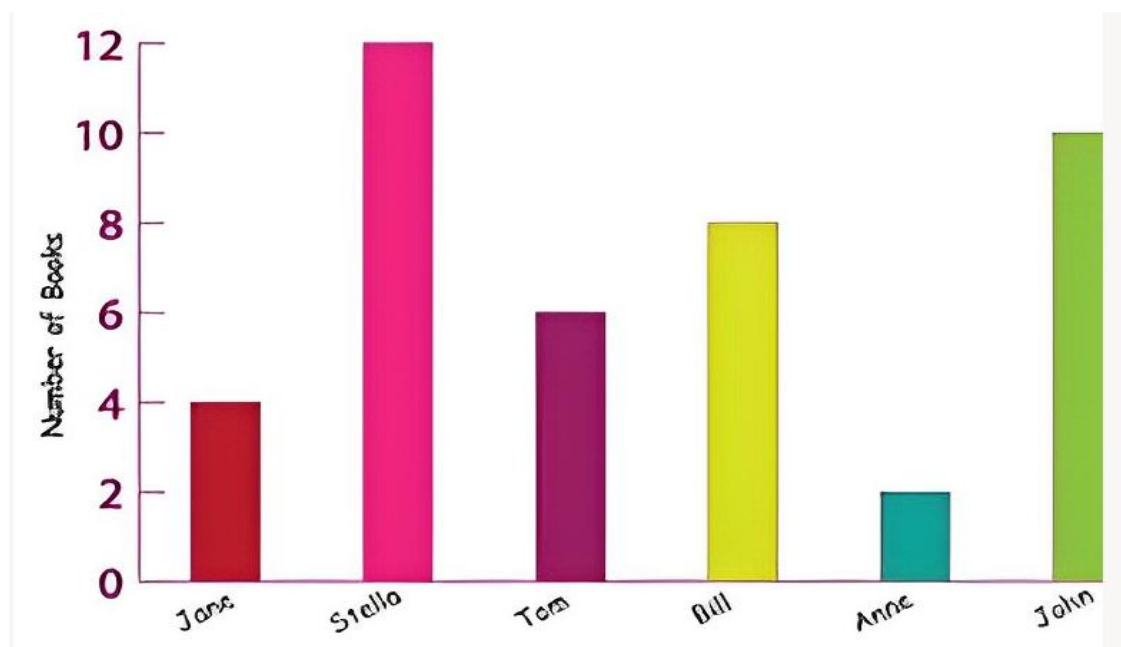
MATHS (ICSE Understanding Mathematics)

Page No. – 6	Question- 8 to 11
Page No. – 21	Mental Maths Question- 1 (i to x)
Page No. – 24	Check your progress Ques. 2 to 16
Page No. – 37	Question- 4, 9, 16
Page No. – 42	Check your progress Ques. 1 to 7

Operation Based Questions


1. Ram purchased 160 L of milk at ₹50 per L. What did he pay for 160 L milk?
2. If the cost of one dozen articles of the same kind is ₹672. What will be the cost of 18 such articles?
3. There are seven boxes of balls. Each box contain eight balls. Find the total number of balls in seven boxes?
4. A moter bike travels 425 km in 5 hours. How much distance will it cover in 3.2 hours?
5. What should be added to 85672 to get 232456?
6. Anita saved ₹1050, ₹16245 and ₹15675 in three months from her monthly budget. How much money did she have in all?
7. The sum of three numbers is 789034. If two of these number are 18906 and 456082. Find the third number.
8. Mala buys 20 notebooks. If the cost of 1 notebook is ₹15. How much she paid for 20 notebooks.

9. The cost of a cricket bat is ₹4120. What will be the cost of 20 bats?
10. The mass of each gas cylinder is 21 kg 270 g. What is the total mass of 28 such cylinders?
11. The following bar graphs show the number of books John, Anne, Tom, Bill, Stella, and Jana read in the month of January. Read the bar graph carefully and answer the following questions



- (a) How many books did John and Tom read together? _____
- (b) How many books were read in total? _____
- (c) Who read the maximum number of books? _____
- (d) Who read the least number of books? _____

12. Solve the given crossword puzzle



ACROSS

- | | |
|------------------|-------------------|
| 1. 1408 – 427 | 23. 2 + 37 |
| 4. 1627 + 6068 | 24. 401 + 2294 |
| 8. 601 + 3466 | 26. 28 + 53 |
| 9. 6046 – 2918 | 28. 23833 – 11720 |
| 10. 9 + 18 | 30. 62 – 5 |
| 11. 84863 – 2084 | 31. 328 + 1133 |
| 13. 24 + 21 | 32. 10074 – 261 |
| 14. 2109 + 7810 | 35. 2826 + 3220 |
| 15. 58 – 4 | 36. 142 + 442 |
| 17. 420 – 105 | |
| 18. 40 + 946 | |
| 19. 219 + 501 | |
| 21. 499 – 15 | |

DOWN

- | | |
|------------------|-------------------|
| 1. 172 – 82 | 18. 167 – 73 |
| 2. 115 – 29 | 19. 1 + 72 |
| 3. 27929 – 10034 | 20. 25695 + 3445 |
| 4. 4734 + 2645 | 21. 70644 – 21249 |
| 5. 138 + 479 | 22. 21 + 64 |
| 6. 90348 + 2610 | 24. 1300 + 816 |
| 7. 105 – 47 | 25. 110 – 49 |
| 8. 779 – 304 | 26. 1207 – 354 |
| 10. 1 + 23 | 27. 1 + 16 |
| 12. 2 + 19 | 29. 54 + 210 |
| 14. 20 + 71 | 31. 1 + 15 |
| 16. 9 + 37 | 33. 50 + 38 |
| 17. 20 + 10 | 34. 5 + 9 |

PHYSICS

1. Collect atleast 20 objects from your surroundings like chalk, spoon, pen, milk, eraser, oil etc. Verify all its properties of matter. Answer the following questions on the basis of your observations.
 - a) Do they have a definite shape?
 - b) Are all the collected object rigid?
 - c) Are you able to compress these objects?
2. Tabulate various processes which are involved during change in state of matter as given below.

S.No.	Process Name	Change of State	Example
1.	Melting	Solid \longrightarrow liquid	Melting of ice -cream
2.	_____	_____	_____
3.	_____	_____	_____
4.	_____	_____	_____
5.	_____	_____	_____
6.	_____	_____	_____

CHEMISTRY (Chemistry All The Way)

1. Write name and symbols of 15 elements in your chemistry notebook. (Page no. 38)
2. Make an erupting volcano using baking soda and vinegar (Activity given on Page No. – 9)

BIOLOGY

1. Name any 5 animals who lay eggs and 5 animals who give birth to young ones. Paste their pictures in your notebook.

HISTORY/CIVICS

















1. Paste the picture of the following buildings/structure and write their features and importance during ancient time.
 - a. The Great Bath
 - b. Ziggurat
 - c. Drainage System of Harappa
 - d. Hanging Garden

GEOGRAPHY (Inspired Geography)

1. Paste a political map of the world in your copy. Label five different oceans and seven continents with the name.

COMPUTER

1. Match the following:

(a)		
(b)		
(c)		
(d)		
(e)		
(f)		
(g)		
(h)		

2. Draw or paste 1st to 5th generation of computer in your copy and write their time period.

3. Social media is a platform which is trending now a days and almost every person is using it. Write down 5 do's and don'ts which should be taken care of while using social media sites.


GENERAL KNOWLEDGE

1. Pick any 5 famous UNESCO World heritage site of India. Paste the pictures and write few lines about it in notebook.
2. Identify and write the name of different Yoga Postures/Asanas shown below: _____

(a)



(b)



(c)



(d)



(e)



(f)



SANSKRIT

1. डायरी में पृष्ठ संख्या 50 में दी गई सरस्वती वंदना को कंठस्थ करके कॉपी में लिखे।
2. 1 से 20 तक संस्कृत में गिनती अपनी कॉपी में लिखिए।





*The tans will fade
but the memories will
last forever.*

*Happy Summer
Holidays*